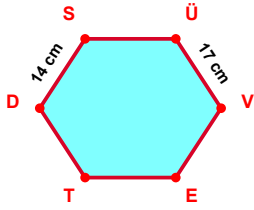
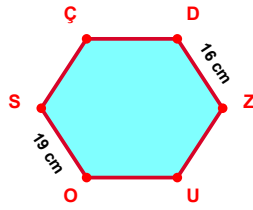


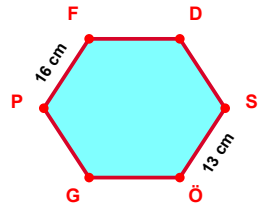
SORU: Aşağıdaki şekillerde verilen, kenar uzunlukları farklarını bulunuz.



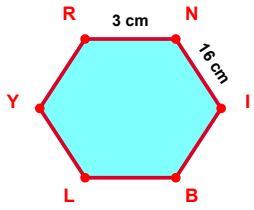
$$|ÜV| - |DS| = \dots\dots\dots$$



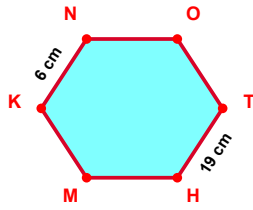
$$|OS| - |DZ| = \dots\dots\dots$$



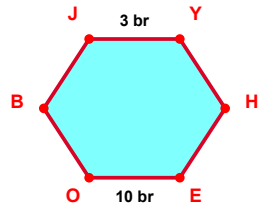
$$|PF| - |SÖ| = \dots\dots\dots$$



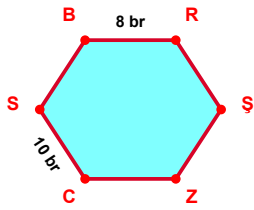
$$|NI| - |RN| = \dots\dots\dots$$



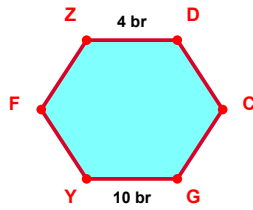
$$|TH| - |KN| = \dots\dots\dots$$



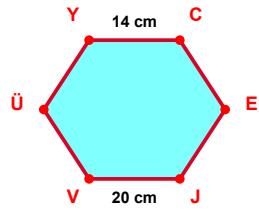
$$|EO| - |JY| = \dots\dots\dots$$



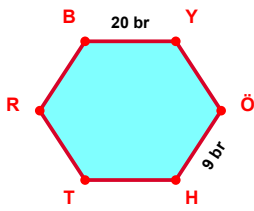
$$|CS| - |BR| = \dots\dots\dots$$



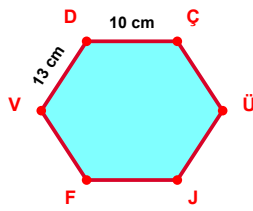
$$|GY| - |ZD| = \dots\dots\dots$$



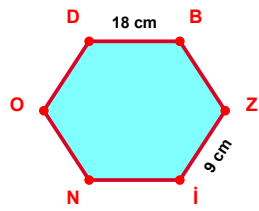
$$|JV| - |YC| = \dots\dots\dots$$



$$|BY| - |ÖH| = \dots\dots\dots$$

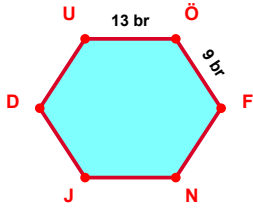


$$|VD| - |DÇ| = \dots\dots\dots$$

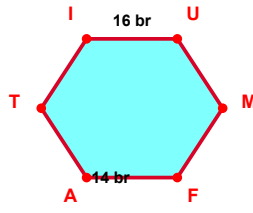


$$|DB| - |Zİ| = \dots\dots\dots$$

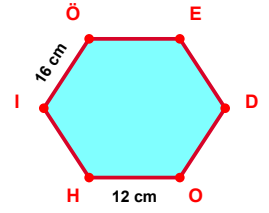
SORU: Aşağıdaki şekillerde verilen, kenar uzunlukları farklarını bulunuz.



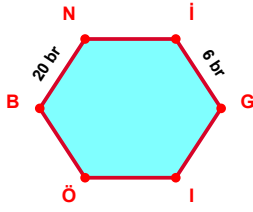
$$|UÖ| - |ÖF| = \dots\dots\dots$$



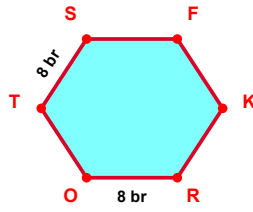
$$|IU| - |FA| = \dots\dots\dots$$



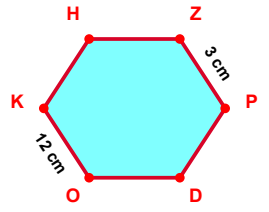
$$|ÖI| - |OH| = \dots\dots\dots$$



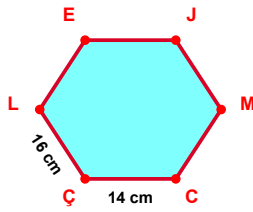
$$|BN| - |İG| = \dots\dots\dots$$



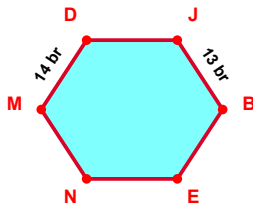
$$|TS| - |RO| = \dots\dots\dots$$



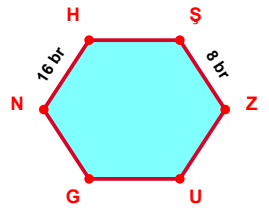
$$|OK| - |ZP| = \dots\dots\dots$$



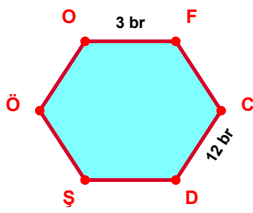
$$|ÇL| - |CC| = \dots\dots\dots$$



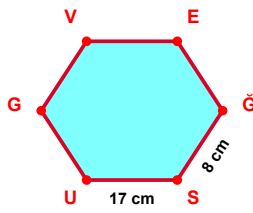
$$|MD| - |JB| = \dots\dots\dots$$



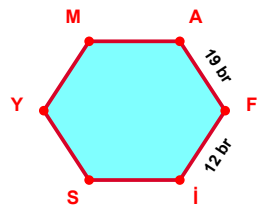
$$|NH| - |ŞZ| = \dots\dots\dots$$



$$|CD| - |OF| = \dots\dots\dots$$



$$|SU| - |ĞS| = \dots\dots\dots$$



$$|AF| - |İF| = \dots\dots\dots$$

## SÜREÇ ODAKLI DEĞERLENDİRME ÖLÇEĞİ

Doğru Sayısı: ..... / 24

Öğretmen ilgili kutucuğu işaretler.

Geliştirilmeli (0-8)

İyi (9-14)

Çok İyi (15-20)

Mükemmel (21-24)

☐
☐
☐
☐

Hazırlayan: .....

Bu bölüme sınıfınızın ilgili kazanıma yönelik genel durumuna ilişkin gözlem ve izlenimlerinizi, öğrencilerinizin bu kazanımla ilgili öğrenme eksikliklerini ve bu eksikliklerin giderilmesi amacıyla yaptığınız/yapmayı planladığınız faaliyetleri not edebilirsiniz.

No	Adı - Soyadı	Toplam Puan	Değerlendirme
1			
2			
3			
4			
5			
6			
7			
8			
9			
10			
11			
12			
13			
14			
15			
16			
17			
18			
19			
20			
21			
22			
23			
24			
25			
26			
27			
28			
29			
30			
31			
32			
33			
34			
35			

Hazırlayan: ..... ..